



Name _____


1. Circle the object that is lighter.



2. Circle the object that is taller.



3. Circle the object that will hold more.



4. Circle the object that is shorter.



5. Circle the object that is heavier.



6. Circle the object that is bigger.

