

Materials: Connecting cubes

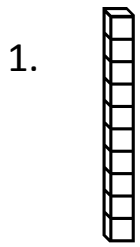
Directions –

Students complete problems 1-3.

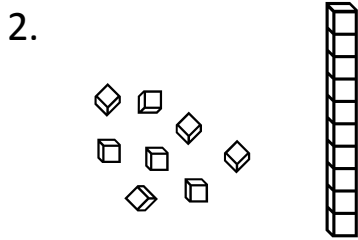
For problems 4 and 5, give students connecting cubes and have them build and show the number.

Name _____

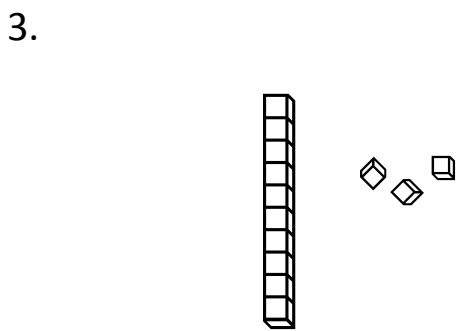
How many tens and ones?



_____ ten(s) and _____ one(s)



_____ ten(s) and _____ one(s)



_____ ten(s) and _____ one(s)

4. Show 11 using groups of tens and ones.

5. Show 17 using groups of tens and ones.