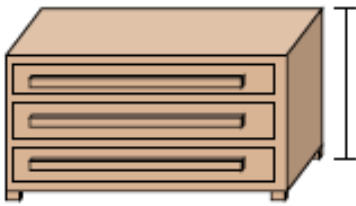


Name _____

Circle the correct measurement.

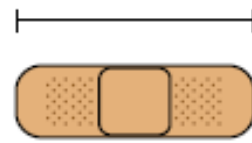
1.



2) Dresser

- A. 90 centimeters
- B. 3 meters
- C. 45 centimeters
- D. 30 centimeters

2.



Bandage

- A. 60 centimeters
- B. 3 kilometers
- C. 9 centimeters
- D. 1 meter

3.

Which choice best represents the length of a dvd?

- A. 10 millimeters
- B. 10 meters
- C. 10 kilometers
- D. 10 centimeters

4.

Which choice best represents the height of a ferris wheel?

- A. 25 meters
- B. 25 kilometers
- C. 25 centimeters
- D. 25 millimeters

Complete the conversion tables

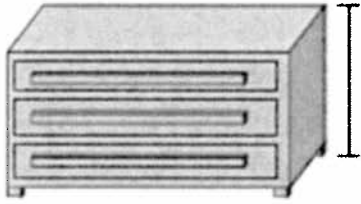
Meter	Centimeter
	200
10	
	800

Milliliters	Liters
1,000	
9,000	
	3

Name Wzy

Circle the correct measurement.


1.



2) Dresser

- A. 90 centimeters
- B. 3 meters
- C. 45 centimeters
- D. 30 centimeters

2.



Bandage

- A. 60 centimeters
- B. 3 kilometers
- C. 9 centimeters
- D. 1 meter

3.

Which choice best represents the length of a dvd?

- A. 10 millimeters
- B. 10 meters
- C. 10 kilometers
- D. 10 centimeters

4.

Which choice best represents the height of a ferris wheel?

- A. 25 meters
- B. 25 kilometers
- C. 25 centimeters
- D. 25 millimeters

Complete the conversion tables

Meter	Centimeter
2	200
10	1000
8	800

Milliliters	Liters
1,000	1
9,000	9
3,000	3