

Name \_\_\_\_\_

Circle the correct measurement.

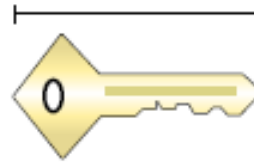
1.



Ferris Wheel

- A. 30 centimeters
- B. 5 meters
- C. 50 kilometers
- D. 23 meters

2.



Key

- A. 5 centimeters
- B. 2 meters
- C. 15 centimeters
- D. 150 centimeters

3.

Which choice best represents the length of a river?

- A. 24 meters
- B. 24 centimeters
- C. 24 millimeters
- D. 24 kilometers

4.

Which choice best represents the height of a piece of popcorn?

- A. 25 meters
- B. 25 millimeters
- C. 25 kilometers
- D. 25 centimeters

Complete the conversion tables


Grams	Kilograms
	40
3,000	
	8

Milliliters	Liters
4,000	
	6

Name Key

Circle the correct measurement.


1.



Ferris Wheel

- A. 30 centimeters
- B. 5 meters
- C. 50 kilometers
- D. 23 meters

2.



Key

- A. 5 centimeters
- B. 2 meters
- C. 15 centimeters
- D. 150 centimeters

3.

Which choice best represents the length of a river?

- A. 24 meters
- B. 24 centimeters
- C. 24 millimeters
- D. 24 kilometers

4.

Which choice best represents the height of a piece of popcorn?

- A. 25 meters
- B. 25 millimeters
- C. 25 kilometers
- D. 25 centimeters

Complete the conversion tables

Grams	Kilograms
40,000	40
3,000	3
8,000	8

Milliliters	Liters
4,000	4
6,000	6