


Name \_\_\_\_\_

Circle the correct measurement.

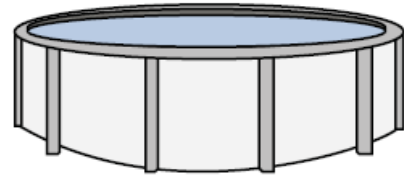
1.



Soda in a can

- A. 4 Pints
- B. 4 Cups
- C. 1 Gallon
- D. 1.5 Cups

2.



Water in a pool

- A. 3,000 Gallons
- B. 25 Cups
- C. 5,000 Feet
- D. 20 Gallons

3.

Which choice best represents the height an airplane flies?

- A. 6 yards
- B. 6 feet
- C. 6 inches
- D. 6 miles

4.

Which choice best represents the length of a toothbrush?

- A. 7 miles
- B. 7 feet
- C. 7 inches
- D. 7 yards

Complete the conversion tables

<b>Pounds</b>	<b>Ounces</b>
	80
	128

<b>Yards</b>	<b>Feet</b>	<b>Inches</b>
	3	
4		
		72

Name Key

Circle the correct measurement.


1.



Soda in a can

- A. 4 Pints
- B. 4 Cups
- C. 1 Gallon
- D. 1.5 Cups

2.



Water in a pool

- A. 3,000 Gallons
- B. 25 Cups
- C. 5,000 Feet
- D. 20 Gallons

3.

Which choice best represents the height an airplane flies?

- A. 6 yards
- B. 6 feet
- C. 6 inches
- D. 6 miles

4.

Which choice best represents the length of a toothbrush?

- A. 7 miles
- B. 7 feet
- C. 7 inches
- D. 7 yards

Complete the conversion tables

Pounds	Ounces
10	80
16	128

Yards	Feet	Inches
1	3	36
4	12	144
2	6	<del>36</del> 72