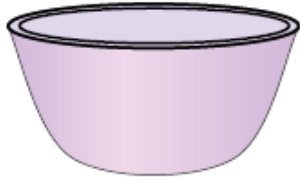


Name _____

Circle the correct measurement.


1.



Cereal Bowl

- A. 4 Pints
- B. 1 Pint
- C. 2 Gallons
- D. 0.5 Gallon

2.



Eyedropper holds

- A. 3 Gallons
- B. 1 Pint
- C. 1 Cup
- D. Less than 1 Cup

3.

Which choice best represents the distance from NYC to Albany, NY?

- A. 150 feet
- B. 150 miles
- C. 150 inches
- D. 150 yards

4.

Which choice best represents the height of a glue stick?

- A. 3 inches
- B. 3 yards
- C. 3 miles
- D. 3 feet

Complete the conversion tables


| Cups | Pints |
|------|-------|
| 14 | |
| | 5 |
| | 6 |
| | |

| Yards | Feet | Inches |
|-------|------|--------|
| | 9 | |
| 12 | | 432 |

Name Keyz

Circle the correct measurement.

1.



Cereal Bowl


A. 4 Pints

B. 1 Pint

C. 2 Gallons

D. 0.5 Gallon

2.



Eyedropper holds

A. 3 Gallons

B. 1 Pint

C. 1 Cup

D. Less than 1 Cup

3.

Which choice best represents the distance from NYC to Albany, NY?

A. 150 feet

B. 150 miles

C. 150 inches

D. 150 yards

4.

Which choice best represents the height of a glue stick?

A. 3 inches

B. 3 yards

C. 3 miles

D. 3 feet

Complete the conversion tables

| Cups | Pints |
|------|-------|
| 14 | 7 |
| 10 | 5 |
| 12 | 6 |

| Yards | Feet | Inches |
|-------|------|--------|
| 3 | 9 | 108 |
| 12 | 36 | 432 |