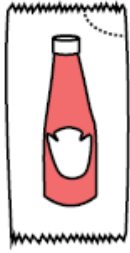


Name _____

Circle the correct measurement.

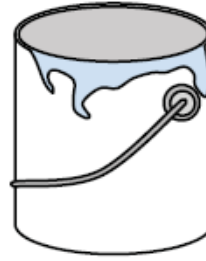
1.



Ketchup in a packet

- A. 1.5 Pints
- B. 0.5 Gallon
- C. 2 Quarts
- D. Less than 1 Cup

2.



Paint in a can

- A. 1 Gallon
- B. 0.5 Pint
- C. 1 Cup
- D. 3 Ounces

3.

Which choice best represents the height of a sheet of paper?

- A. 11 inches
- B. 11 feet
- C. 11 yards
- D. 11 miles

4.

Which choice best represents the length of a skate board?

- A. 30 yards
- B. 30 miles
- C. 30 inches
- D. 30 feet


Complete the conversion tables.

Gallons	Quarts
	20
	12
1	

Yards	Feet	Inches
2		72
5		


Name Keyz

Circle the correct measurement.



Ketchup in a packet

- A. 1.5 Pints
- B. 0.5 Gallon
- C. 2 Quarts
- D. Less than 1 Cup



Paint in a can

- A. 1 Gallon
- B. 0.5 Pint
- C. 1 Cup
- D. 3 Ounces

3. Which choice best represents the height of a sheet of paper?

- A. 11 inches
- B. 11 feet
- C. 11 yards
- D. 11 miles

4. Which choice best represents the length of a skate board?

- A. 30 yards
- B. 30 miles
- C. 30 inches
- D. 30 feet

Complete the conversion tables.

Gallons	Quarts
5	20
3	12
1	4

Yards	Feet	Inches
2	6	72
5	15	180